

Thursday 14 June 2012 – Morning

A2 GCE MATHEMATICS (MEI)

4754A Applications of Advanced Mathematics (C4) Paper A

QUESTION PAPER

Candidates answer on the Printed Answer Book.

OCR supplied materials:

- Printed Answer Book 4754A
- MEI Examination Formulae and Tables (MF2)

Other materials required:

- Scientific or graphical calculator

Duration: 1 hour 30 minutes



INSTRUCTIONS TO CANDIDATES

These instructions are the same on the Printed Answer Book and the Question Paper.

- The Question Paper will be found in the centre of the Printed Answer Book.
- Write your name, centre number and candidate number in the spaces provided on the Printed Answer Book. Please write clearly and in capital letters.
- **Write your answer to each question in the space provided in the Printed Answer Book.** Additional paper may be used if necessary but you must clearly show your candidate number, centre number and question number(s).
- Use black ink. HB pencil may be used for graphs and diagrams only.
- Read each question carefully. Make sure you know what you have to do before starting your answer.
- Answer **all** the questions.
- Do **not** write in the bar codes.
- You are permitted to use a scientific or graphical calculator in this paper.
- Final answers should be given to a degree of accuracy appropriate to the context.

INFORMATION FOR CANDIDATES

This information is the same on the Printed Answer Book and the Question Paper.

- The number of marks is given in brackets [] at the end of each question or part question on the Question Paper.
- You are advised that an answer may receive **no marks** unless you show sufficient detail of the working to indicate that a correct method is being used.
- The total number of marks for this paper is **72**.
- The Printed Answer Book consists of **16** pages. The Question Paper consists of **4** pages. Any blank pages are indicated.
- This paper will be followed by **Paper B: Comprehension**.

INSTRUCTION TO EXAMS OFFICER/INVIGILATOR

- Do not send this Question Paper for marking; it should be retained in the centre or recycled. Please contact OCR Copyright should you wish to re-use this document.

Section A (36 marks)

- 1 Solve the equation $\frac{4x}{x+1} - \frac{3}{2x+1} = 1$. [5]
- 2 Find the first four terms in the binomial expansion of $\sqrt{1+2x}$. State the set of values of x for which the expansion is valid. [5]
- 3 The total value of the sales made by a new company in the first t years of its existence is denoted by $\text{£}V$. A model is proposed in which the rate of increase of V is proportional to the square root of V . The constant of proportionality is k .
- (i) Express the model as a differential equation.
- Verify by differentiation that $V = (\frac{1}{2}kt + c)^2$, where c is an arbitrary constant, satisfies this differential equation. [4]
- (ii) The value of the company's sales in its first year is $\text{£}10\,000$, and the total value of the sales in the first two years is $\text{£}40\,000$. Find V in terms of t . [4]
- 4 Prove that $\sec^2\theta + \operatorname{cosec}^2\theta = \sec^2\theta \operatorname{cosec}^2\theta$. [4]
- 5 Given the equation $\sin(x + 45^\circ) = 2 \cos x$, show that $\sin x + \cos x = 2\sqrt{2} \cos x$.
- Hence solve, correct to 2 decimal places, the equation for $0^\circ \leq x \leq 360^\circ$. [6]
- 6 Solve the differential equation $\frac{dy}{dx} = \frac{y}{x(x+1)}$, given that when $x=1$, $y=1$. Your answer should express y explicitly in terms of x . [8]

Section B (36 marks)

7 Fig. 7a shows the curve with the parametric equations

$$x = 2 \cos \theta, \quad y = \sin 2\theta, \quad -\frac{\pi}{2} \leq \theta \leq \frac{\pi}{2}.$$

The curve meets the x -axis at O and P. Q and R are turning points on the curve. The scales on the axes are the same.

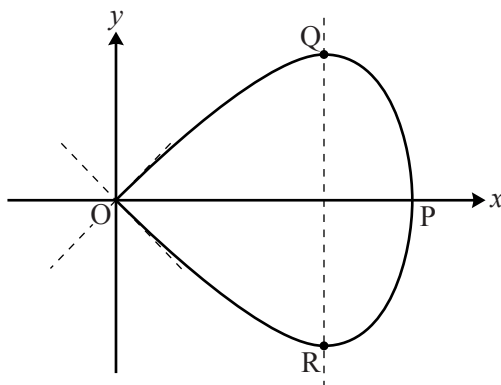


Fig. 7a

- (i) State, with their coordinates, the points on the curve for which $\theta = -\frac{\pi}{2}$, $\theta = 0$ and $\theta = \frac{\pi}{2}$. [3]
- (ii) Find $\frac{dy}{dx}$ in terms of θ . Hence find the gradient of the curve when $\theta = \frac{\pi}{2}$, and verify that the two tangents to the curve at the origin meet at right angles. [5]
- (iii) Find the exact coordinates of the turning point Q. [3]

When the curve is rotated about the x -axis, it forms a paperweight shape, as shown in Fig. 7b.

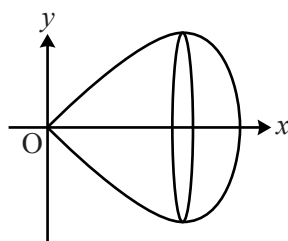


Fig. 7b

- (iv) Express $\sin^2 \theta$ in terms of x . Hence show that the cartesian equation of the curve is $y^2 = x^2(1 - \frac{1}{4}x^2)$. [4]
- (v) Find the volume of the paperweight shape. [4]

- 8 With respect to cartesian coordinates $Oxyz$, a laser beam ABC is fired from the point $A(1, 2, 4)$, and is reflected at point B off the plane with equation $x + 2y - 3z = 0$, as shown in Fig. 8. A' is the point $(2, 4, 1)$, and M is the midpoint of AA' .

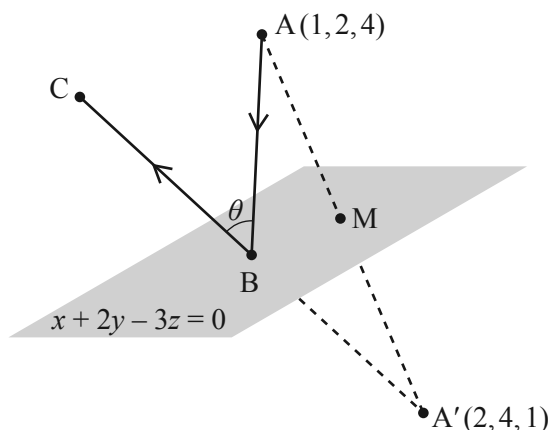


Fig. 8

- (i) Show that AA' is perpendicular to the plane $x + 2y - 3z = 0$, and that M lies in the plane. [4]

The vector equation of the line AB is $\mathbf{r} = \begin{pmatrix} 1 \\ 2 \\ 4 \end{pmatrix} + \lambda \begin{pmatrix} 1 \\ -1 \\ 2 \end{pmatrix}$.

- (ii) Find the coordinates of B , and a vector equation of the line $A'B$. [6]
- (iii) Given that $A'BC$ is a straight line, find the angle θ . [4]
- (iv) Find the coordinates of the point where BC crosses the Oxz plane (the plane containing the x - and z -axes). [3]

Copyright Information

OCR is committed to seeking permission to reproduce all third-party content that it uses in its assessment materials. OCR has attempted to identify and contact all copyright holders whose work is used in this paper. To avoid the issue of disclosure of answer-related information to candidates, all copyright acknowledgements are reproduced in the OCR Copyright Acknowledgements Booklet. This is produced for each series of examinations and is freely available to download from our public website (www.ocr.org.uk) after the live examination series.

If OCR has unwittingly failed to correctly acknowledge or clear any third-party content in this assessment material, OCR will be happy to correct its mistake at the earliest possible opportunity.

For queries or further information please contact the Copyright Team, First Floor, 9 Hills Road, Cambridge CB2 1GE.

OCR is part of the Cambridge Assessment Group; Cambridge Assessment is the brand name of University of Cambridge Local Examinations Syndicate (UCLES), which is itself a department of the University of Cambridge.