



**F**

**Monday 24 June 2013 – Morning**

**GCSE TWENTY FIRST CENTURY SCIENCE  
PHYSICS A**

**A183/01** Module P7 (Foundation Tier)

Candidates answer on the Question Paper.  
A calculator may be used for this paper.

**Duration:** 1 hour

**OCR supplied materials:**  
None

**Other materials required:**

- Pencil
- Ruler (cm/mm)



Candidate forename		Candidate surname	
-----------------------	--	----------------------	--

Centre number						Candidate number				
---------------	--	--	--	--	--	------------------	--	--	--	--

**INSTRUCTIONS TO CANDIDATES**

- Write your name, centre number and candidate number in the boxes above. Please write clearly and in capital letters.
- Use black ink. HB pencil may be used for graphs and diagrams only.
- Answer **all** the questions.
- Read each question carefully. Make sure you know what you have to do before starting your answer.
- Write your answer to each question in the space provided. Additional paper may be used if necessary but you must clearly show your candidate number, centre number and question number(s).
- Do **not** write in the bar codes.

**INFORMATION FOR CANDIDATES**

- Your quality of written communication is assessed in questions marked with a pencil (✎).
- A list of useful relationships is printed on pages two and three.
- The number of marks is given in brackets [ ] at the end of each question or part question.
- The total number of marks for this paper is **60**.
- This document consists of **16** pages. Any blank pages are indicated.

## TWENTY FIRST CENTURY SCIENCE EQUATIONS

### Useful relationships

#### The Earth in the Universe

$$\text{distance} = \text{wave speed} \times \text{time}$$

$$\text{wave speed} = \text{frequency} \times \text{wavelength}$$

#### Sustainable energy

$$\text{energy transferred} = \text{power} \times \text{time}$$

$$\text{power} = \text{voltage} \times \text{current}$$

$$\text{efficiency} = \frac{\text{energy usefully transferred}}{\text{total energy supplied}} \times 100\%$$

#### Explaining motion

$$\text{speed} = \frac{\text{distance travelled}}{\text{time taken}}$$

$$\text{acceleration} = \frac{\text{change in velocity}}{\text{time taken}}$$

$$\text{momentum} = \text{mass} \times \text{velocity}$$

$$\text{change of momentum} = \text{resultant force} \times \text{time for which it acts}$$

$$\text{work done by a force} = \text{force} \times \text{distance moved in the direction of the force}$$

$$\text{amount of energy transferred} = \text{work done}$$

$$\text{change in gravitational potential energy} = \text{weight} \times \text{vertical height difference}$$

$$\text{kinetic energy} = \frac{1}{2} \times \text{mass} \times [\text{velocity}]^2$$

#### Electric circuits

$$\text{power} = \text{voltage} \times \text{current}$$

$$\text{resistance} = \frac{\text{voltage}}{\text{current}}$$

$$\frac{\text{voltage across primary coil}}{\text{voltage across secondary coil}} = \frac{\text{number of turns in primary coil}}{\text{number of turns in secondary coil}}$$

#### Radioactive materials

$$\text{energy} = \text{mass} \times [\text{speed of light in a vacuum}]^2$$

**Observing the Universe**

$$\text{lens power} = \frac{1}{\text{focal length}}$$

$$\text{magnification} = \frac{\text{focal length of objective lens}}{\text{focal length of eyepiece lens}}$$

$$\text{speed of recession} = \text{Hubble constant} \times \text{distance}$$

$$\text{pressure} \times \text{volume} = \text{constant}$$


$$\frac{\text{pressure}}{\text{temperature}} = \text{constant}$$

$$\frac{\text{volume}}{\text{temperature}} = \text{constant}$$

$$\text{energy} = \text{mass} \times [\text{speed of light in a vacuum}]^2$$

Answer **all** the questions.

- 1 Explain how the Moon can cause a solar eclipse.



Include a diagram in your answer.



*The quality of written communication will be assessed in your answer.*

..... [6]

**[Total: 6]**

2 The lenses in a telescope are used to bend the light from stars.

(a) (i) Complete the diagram to show how the light from a star will be bent by the lens.



[2]

(ii) The lens bends the light.

What is the name of this process?

Put a ring around the correct answer.

**diffraction**

**magnification**

**reflection**

**refraction**

[1]

(iii) What happens to the light as it enters the lens?

Put ticks (✓) in the boxes next to the **two** correct answers.

The image becomes clearer.

The light wave turns upside down.

All the light is reflected by the lens.

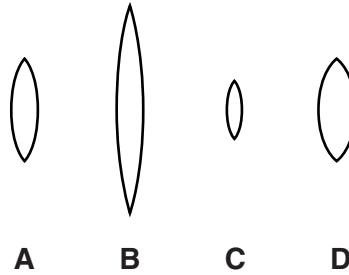
The speed of the light wave changes.

The direction of the light wave changes.

[2]

(b) Here is some information about four lenses.

All the lenses are made of the same high quality glass.



Lens	Diameter in cm	Focal length in m
<b>A</b>	10	0.5
<b>B</b>	20	1
<b>C</b>	6	1
<b>D</b>	10	0.2

- (i) Which lens is the most powerful? ..... [1]
- (ii) Calculate the power of lens **A**.

power = ..... dioptres [2]

(c) Here is a table of data about three more lenses.

Lens	Diameter in cm	Power in D
X	15	5
Y	40	1
Z	10	2

Which two lenses would be the **best** to use to make a telescope?

eyepiece lens .....

Justify your choice.

.....

.....

objective lens .....

Justify your choice.


.....

.....

[4]

[Total: 12]

3 Astronomers control the Hubble Space Telescope using computers.



Why is computer control of the Hubble Space Telescope so useful for astronomers?



*The quality of written communication will be assessed in your answer.*

.....

.....

.....

.....

.....

.....

.....

.....

.....

.....

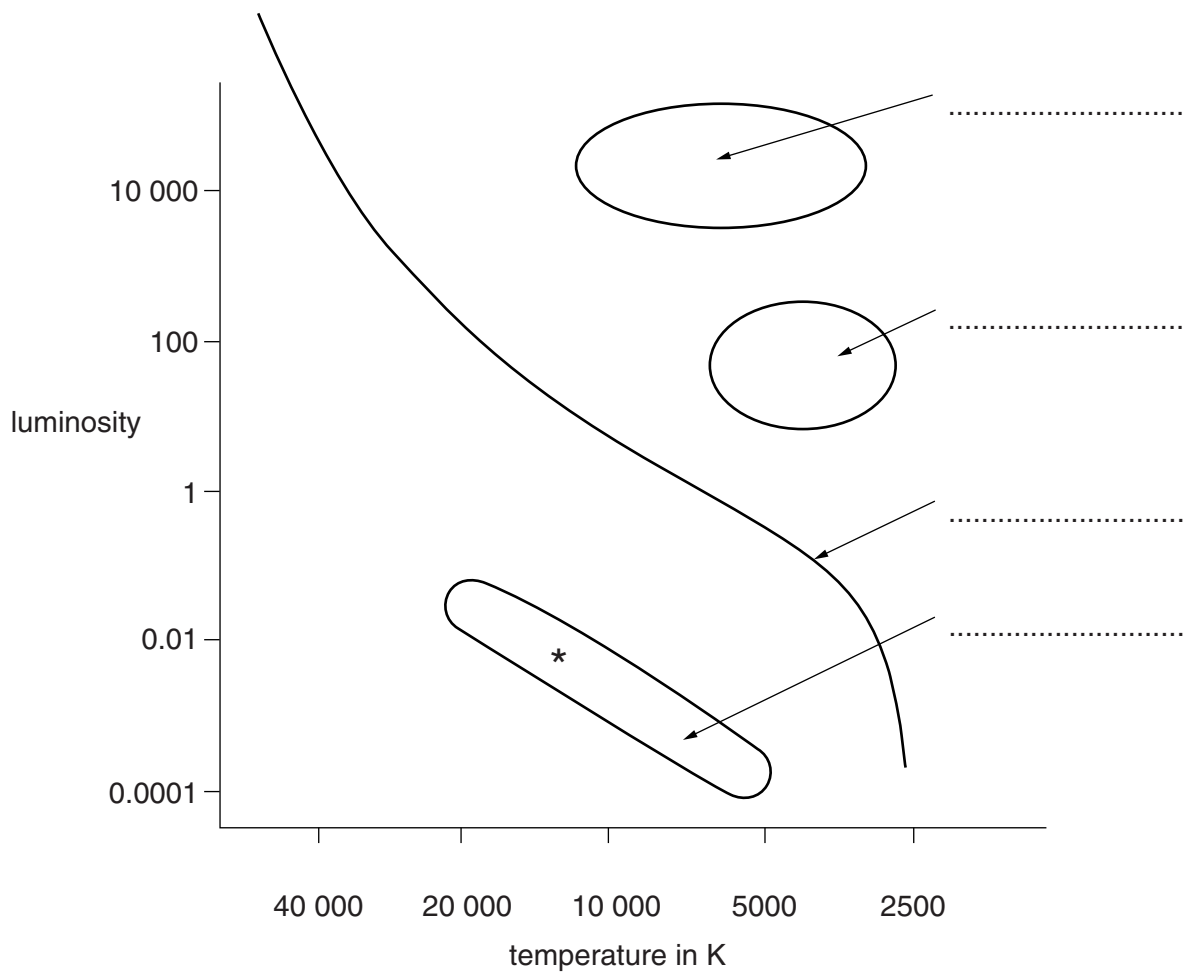
.....

..... [6]

**[Total: 6]**



4 The graph shows a Hertzsprung-Russell diagram.




The luminosity of the Sun is 1.

- (a) Complete the labels for the regions on the Hertzsprung-Russell diagram. [4]
- (b) Put a cross on the Hertzsprung-Russell diagram to show the position of the Sun. [1]
- (c) At the end of their lives most stars cool down and emit less and less energy.

Draw an arrow on the Hertzsprung-Russell diagram to show the direction the star (\*) would move as it cools down and emits less energy. [2]

**[Total: 7]**

5 A group of people are meeting to discuss where to build a new astronomical observatory to help find out how the Universe started.



(a) (i) Who is talking about reducing effects from the Earth's atmosphere?  
 ..... and ..... and ..... [2]

(ii) Who is talking about light pollution?  
 ..... [1]

(iii) Who is giving non-astronomical reasons?  
 ..... and ..... [2]

(b) Which two groups of people are likely to be at the meeting?

Put ticks (✓) in the boxes next to the **two** best answers.

- astronauts
- hospital workers
- politicians
- scientists
- teachers

[2]

(c) Outside the meeting there is a group of protestors.

Suggest and explain why people might protest against building an astronomical observatory.

.....

.....

.....

.....

..... [3]

[Total: 10]



7 Jo is an astrophysicist interested in the physics of stars.

(a) Jo knows that there is a force holding the gas in a star.

What is the force? ..... [1]

(b) Jo is trying to make a mathematical model for the temperature of the gas inside stars.

(i) Write down two equations Jo would need to use.

equation 1

equation 2

[2]

(ii) Where is the temperature greatest inside a star?

..... [1]

(iii) What are the two main methods of energy transfer inside a star?

Put ticks (✓) in the boxes next to the **two** correct answers.

combustion

conduction

convection

radiation

reflection

[2]

- (c) (i) Jo knows the surface temperature of the Sun is about 5800K.

What is this temperature in °C?

temperature = ..... °C [2]

- (ii) The radiation from a red giant has a lower peak frequency than the radiation from the Sun.

What does this tell us about the surface temperature of a red giant?

..... [1]

- (d) In a red giant the main source of energy is the fusion of helium nuclei in the **core**.

Explain how this shows that the core temperature of the red giant must be higher than the core temperature of the Sun.

.....  
.....  
.....  
..... [2]

- (e) The luminosity of a star depends upon its temperature.

How can the luminosity of a star be used to get an estimate of its distance from the Earth?

.....  
.....  
..... [2]

[Total: 13]

**END OF QUESTION PAPER**

15  
BLANK PAGE

**PLEASE DO NOT WRITE ON THIS PAGE**

**PLEASE DO NOT WRITE ON THIS PAGE**



**Copyright Information**

OCR is committed to seeking permission to reproduce all third-party content that it uses in its assessment materials. OCR has attempted to identify and contact all copyright holders whose work is used in this paper. To avoid the issue of disclosure of answer-related information to candidates, all copyright acknowledgements are reproduced in the OCR Copyright Acknowledgements Booklet. This is produced for each series of examinations and is freely available to download from our public website ([www.ocr.org.uk](http://www.ocr.org.uk)) after the live examination series.

If OCR has unwittingly failed to correctly acknowledge or clear any third-party content in this assessment material, OCR will be happy to correct its mistake at the earliest possible opportunity.

For queries or further information please contact the Copyright Team, First Floor, 9 Hills Road, Cambridge CB2 1GE.

OCR is part of the Cambridge Assessment Group; Cambridge Assessment is the brand name of University of Cambridge Local Examinations Syndicate (UCLES), which is itself a department of the University of Cambridge.