

Monday 25 June 2012 – Afternoon

**GCSE TWENTY FIRST CENTURY SCIENCE
CHEMISTRY A**

A172/02 Modules C4 C5 C6 (Higher Tier)

Candidates answer on the Question Paper.
A calculator may be used for this paper.

OCR supplied materials:
None

Other materials required:

- Pencil
- Ruler (cm/mm)

Duration: 1 hour



Candidate forename		Candidate surname	
-----------------------	--	----------------------	--

Centre number						Candidate number				
---------------	--	--	--	--	--	------------------	--	--	--	--

INSTRUCTIONS TO CANDIDATES

- Write your name, centre number and candidate number in the boxes above. Please write clearly and in capital letters.
- Use black ink. HB pencil may be used for graphs and diagrams only.
- Answer **all** the questions.
- Read each question carefully. Make sure you know what you have to do before starting your answer.
- Write your answer to each question in the space provided. Additional paper may be used if necessary but you must clearly show your candidate number, centre number and question number(s).
- Do **not** write in the bar codes.

INFORMATION FOR CANDIDATES

- Your quality of written communication is assessed in questions marked with a pencil (✎).
- The number of marks is given in brackets [] at the end of each question or part question.
- The total number of marks for this paper is **60**.
- This document consists of **20** pages. Any blank pages are indicated.
- The Periodic Table is printed on the back page.
- A list of qualitative tests for ions is printed on page 2.

TWENTY FIRST CENTURY SCIENCE DATA SHEET

Qualitative analysis

Tests for ions with a positive charge

Ion	Test	Observation
calcium Ca^{2+}	add dilute sodium hydroxide	a white precipitate forms; the precipitate does not dissolve in excess sodium hydroxide
copper Cu^{2+}	add dilute sodium hydroxide	a light blue precipitate forms; the precipitate does not dissolve in excess sodium hydroxide
iron(II) Fe^{2+}	add dilute sodium hydroxide	a green precipitate forms; the precipitate does not dissolve in excess sodium hydroxide
iron(III) Fe^{3+}	add dilute sodium hydroxide	a red-brown precipitate forms; the precipitate does not dissolve in excess sodium hydroxide
zinc Zn^{2+}	add dilute sodium hydroxide	a white precipitate forms; the precipitate dissolves in excess sodium hydroxide

Tests for ions with a negative charge

Ion	Test	Observation
carbonate CO_3^{2-}	add dilute acid	the solution effervesces; carbon dioxide gas is produced (the gas turns lime water from colourless to milky)
chloride Cl^-	add dilute nitric acid, then add silver nitrate	a white precipitate forms
bromide Br^-	add dilute nitric acid, then add silver nitrate	a cream precipitate forms
iodide I^-	add dilute nitric acid, then add silver nitrate	a yellow precipitate forms
sulfate SO_4^{2-}	add dilute acid, then add barium chloride or barium nitrate	a white precipitate forms

Answer **all** the questions.

1 Rubidium is an element in Group 1.

Find rubidium on the Periodic Table.

(a) Which of the following statements about rubidium are **true** and which are **false**?

Put a tick (✓) in the correct box for each statement.

	true	false
Rubidium is more reactive than sodium.	<input type="checkbox"/>	<input type="checkbox"/>
Rubidium is a non-metal.	<input type="checkbox"/>	<input type="checkbox"/>
Rubidium has a lower proton number than lithium.	<input type="checkbox"/>	<input type="checkbox"/>
Rubidium reacts with water to make hydrogen gas.	<input type="checkbox"/>	<input type="checkbox"/>

[2]

(b) The formula of lithium hydroxide is LiOH.

What is the formula of rubidium hydroxide?

formula [1]

[Total: 3]

(b) Sodium and potassium are both in Group 1 of the Periodic Table.

Give one similarity and one difference between the arrangement of electrons in an atom of sodium and an atom of potassium.

.....
 [2]

[Total: 8]

3 The table below shows the number of protons and electrons in five particles, **A**, **B**, **C**, **D** and **E**.

Each particle is either an atom or an ion.

Particle	Number of protons	Number of electrons
A	3	3
B	9	9
C	3	2
D	8	10
E	17	17

(a) Use the letters **A**, **B**, **C**, **D** and **E**, to answer the following questions.

(i) Which two particles are atoms from Group 7 of the Periodic Table?

answer and [1]

(ii) Which two particles are an atom and an ion of the same element?

answer and [1]

(iii) Which particle is a negative ion?

answer [1]

(b) Particle **C** is an ion.

What is the overall charge on particle **C**?

answer [1]

[Total: 4]

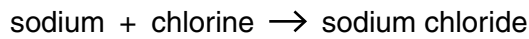
4 Liz cuts a piece of sodium with a knife.

(a) When first cut, the surface of the sodium is very shiny.

Describe and explain how the appearance of the sodium changes over the next few minutes.

.....
.....
..... [3]

(b) Liz reacts sodium (Na) with chlorine (Cl₂) to make sodium chloride.



Write a balanced symbol equation for this reaction.

..... [2]

[Total: 5]





BLANK PAGE

Question 5 begins on page 8

PLEASE DO NOT WRITE ON THIS PAGE

5 Four gases that are in the air are nitrogen, oxygen, argon and carbon dioxide.

(a) Draw a straight line to connect the **name** of each gas to the correct **arrangement of atoms and its relative mass**.

name	arrangement of atoms and its relative mass
nitrogen	 relative mass = 32
oxygen	 relative mass = 40
argon	 relative mass = 44
carbon dioxide	 relative mass = 28

[2]

(b) Which of the following statements about gases in the air are **true**?

Put ticks (✓) in the boxes next to the **two** correct answers.

All of the gases in the air are elements.

Air contains only non-metal elements.

There are weak attractions between molecules in air.

All the gases have high melting points and boiling points.

The gases are good conductors of electricity.

[2]

(c) Molecules in the air contain atoms that are held together by strong covalent bonds.

Which of the following statements are the **best** descriptions of covalent bonds in these molecules?

Put ticks (✓) in the boxes next to the **two** best answers.

A covalent bond is made by sharing electrons.

The atoms gain positive or negative charges when the bond is made.

The atoms are held together by the attractions between the nuclei of the atoms and the electrons between them.

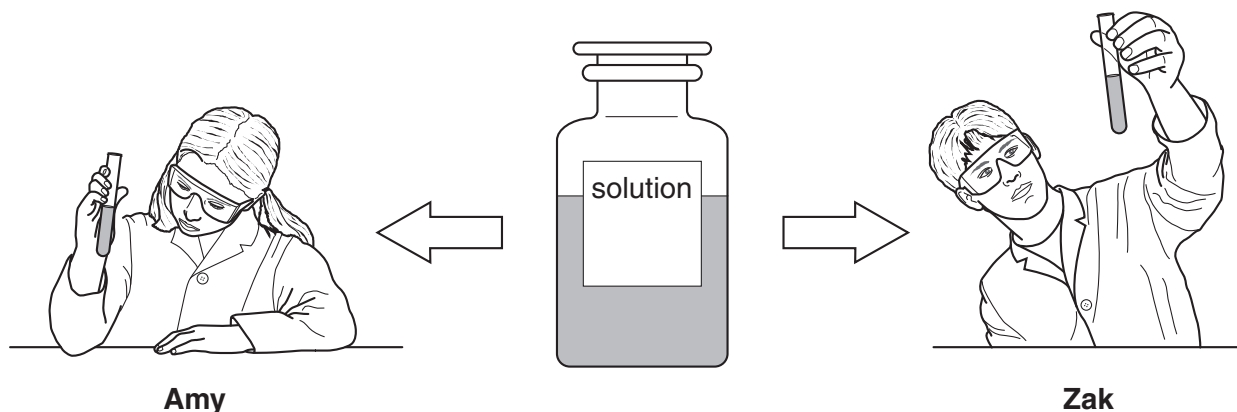
Each atom is surrounded by a sea of electrons that can move.

The atoms are bonded covalently into large, three dimensional structures.

[2]

[Total: 6]

6 Amy and Zak test samples of the same solution.



They do tests to identify the positive metal ions and the negative ions in the solution.

They use a fresh sample for each test.

The boxes show the tests they use and their results.

Amy's results

Test	Result
Add a few drops of dilute sodium hydroxide.	white precipitate
Acidify and add dilute silver nitrate.	white precipitate
Acidify and add dilute barium chloride.	white precipitate

Conclusion

The solution contains a mixture of calcium sulfate and calcium chloride.

Zak's results

Test	Result
Add a few drops of dilute sodium hydroxide...	white precipitate
...then add more dilute sodium hydroxide.	precipitate dissolves
Acidify and add dilute silver nitrate.	white precipitate

Conclusion

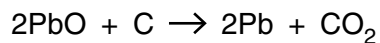
The solution only contains zinc chloride.

7 Jed and Kay live near a lead mine.

The mineral massicot is dug out of this mine.

Massicot contains lead oxide, PbO.

Lead metal can be extracted from massicot by heating it with carbon.



(a) What is the maximum mass of lead that can be extracted from 446 g of lead oxide?

Use the Periodic Table on page 20 to find the relative atomic masses.

Start by working out the relative formula mass of lead oxide.

relative formula mass of lead oxide, PbO =

mass of lead that can be extracted from 446 g lead oxide = g
[3]

(b) The lead mine produces millions of tonnes of lead ore.

Jed and Kay are talking about the advantages and disadvantages of living near the lead mine.



Jed

The lead mine affects the surrounding area because they have to blast out 10 tonnes of rock to get less than a tonne of lead ore.

Kay

Yes, but the lead mine employs many local people.



(i) Kay has just moved into the area. She has a young family.

Give one **advantage** and one **disadvantage** to Kay of living near a lead mine.

.....
.....
..... [2]

(ii) Jed and Kay talk about lead processing at the mine.



Jed
Some waste from processing lead ore is toxic. I think we should close the mine until the process can be made completely safe.



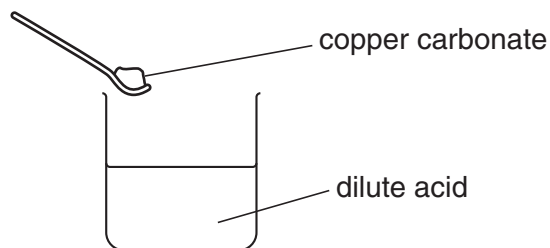
Kay
I don't agree about closing the mine because ...

Suggest reasons that Kay could give for **not** closing the mine.

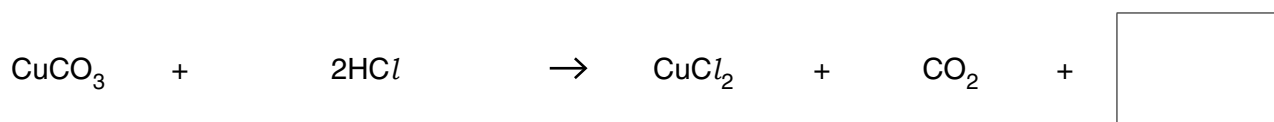
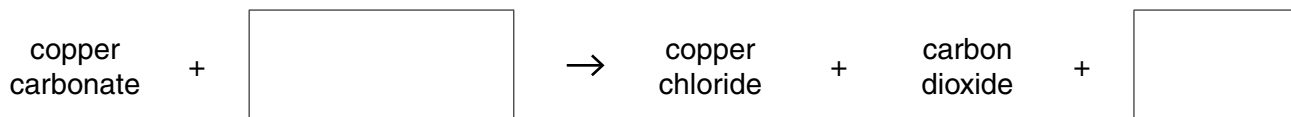
.....
.....
.....
..... [2]

[Total: 7]

- 8 Sue reacts copper carbonate with a dilute acid to make copper chloride.



- (a) Complete the word and symbol equations for the reaction by filling in the empty boxes.



[2]

- (b) Which other chemicals react with the same dilute acid to form copper chloride?

Put rings around the **two** correct answers.

copper hydroxide **copper nitrate** **copper oxide** **copper sulfate**

[1]

- (c) (i) Sue measures the pH during the reaction.

Describe and explain how the pH changes during the reaction.

.....
 [2]

- (ii) What could Sue use to measure the pH?

Put ticks (✓) in the boxes next to **each** correct answer.

sodium hydroxide

pH meter

litmus

universal indicator

[1]

[Total: 6]

- (b) (i) Alex makes a solution of potassium sulfate in his titration.

Alex makes crystals from his solution. He makes 4.5 g of potassium sulfate crystals.

This is 90% of his theoretical yield.

What is his **theoretical** yield?

Put a **ring** around the correct answer.

0.05% 4.05 g 5 g 9 g 10% 45%

[1]

- (ii) Alex did not dry his crystals properly.

His crystals contained 1.0 g of water.

Calculate Alex's percentage yield after he has dried his crystals properly.

percentage yield = % [2]

- (c) Alex's friend Ben does a similar experiment.

He starts with the same volume (25.0 cm³) of the same concentration of potassium hydroxide solution.

He neutralises this with a **more dilute** solution of acid.

- (i) What factor is Ben changing in his experiment?

..... [1]

- (ii) What effect will changing this factor have on the mass of potassium sulfate crystals that Ben makes?

Explain your reasoning.

.....

 [2]

(d) Alex does some more experiments. He reacts dilute sodium hydroxide with hydrochloric acid.

He measures how much hydrochloric acid he needs to neutralise 20cm^3 of dilute sodium hydroxide.

He tests different concentrations of hydrochloric acid.

He uses the **same concentration of sodium hydroxide** every time.

The table shows some of Alex's results.

Concentration of hydrochloric acid in g/dm^3	Volume of hydrochloric acid needed to neutralise 20cm^3 sodium hydroxide in cm^3
10.0	80.0
20.0	
40.0	20.0
	13.3
80.0	10.0

(i) Complete the table by filling in the two empty boxes. [2]

(ii) Complete the ionic equation for the reaction that happens during neutralisation.

Choose formulae from this list.



[1]

[Total: 15]

END OF QUESTION PAPER

18
BLANK PAGE

PLEASE DO NOT WRITE ON THIS PAGE

PLEASE DO NOT WRITE ON THIS PAGE



Copyright Information

OCR is committed to seeking permission to reproduce all third-party content that it uses in its assessment materials. OCR has attempted to identify and contact all copyright holders whose work is used in this paper. To avoid the issue of disclosure of answer-related information to candidates, all copyright acknowledgements are reproduced in the OCR Copyright Acknowledgements Booklet. This is produced for each series of examinations and is freely available to download from our public website (www.ocr.org.uk) after the live examination series.

If OCR has unwittingly failed to correctly acknowledge or clear any third-party content in this assessment material, OCR will be happy to correct its mistake at the earliest possible opportunity.

For queries or further information please contact the Copyright Team, First Floor, 9 Hills Road, Cambridge CB2 1GE.

OCR is part of the Cambridge Assessment Group; Cambridge Assessment is the brand name of University of Cambridge Local Examinations Syndicate (UCLES), which is itself a department of the University of Cambridge.

The Periodic Table of the Elements

	1	2	3	4	5	6	7	0										
	7 Li lithium 3	9 Be beryllium 4	11 Na sodium 11	12 Mg magnesium 12	13 Al aluminium 13	14 N nitrogen 7	15 P phosphorus 15	16 S sulfur 16	17 Cl chlorine 17	18 Ar argon 18								
	19 K potassium 19	20 Ca calcium 20	21 Sc scandium 21	22 Ti titanium 22	23 V vanadium 23	24 Cr chromium 24	25 Mn manganese 25	26 Fe iron 26	27 Co cobalt 27	28 Ni nickel 28	29 Cu copper 29	30 Zn zinc 30	31 Ga gallium 31	32 Ge germanium 32	33 As arsenic 33	34 Se selenium 34	35 Br bromine 35	36 Kr krypton 36
	37 Rb rubidium 37	38 Sr strontium 38	39 Y yttrium 39	40 Zr zirconium 40	41 Nb niobium 41	42 Mo molybdenum 42	43 Tc technetium 43	44 Ru ruthenium 44	45 Rh rhodium 45	46 Pd palladium 46	47 Ag silver 47	48 Cd cadmium 48	49 In indium 49	50 Sn tin 50	51 Sb antimony 51	52 Te tellurium 52	53 I iodine 53	54 Xe xenon 54
	55 Cs caesium 55	56 Ba barium 56	57 La* lanthanum 57	72 Hf hafnium 72	73 Ta tantalum 73	74 W tungsten 74	75 Re rhenium 75	76 Os osmium 76	77 Ir iridium 77	78 Pt platinum 78	79 Au gold 79	80 Hg mercury 80	81 Tl thallium 81	82 Pb lead 82	83 Bi bismuth 83	84 Po polonium 84	85 At astatine 85	86 Rn radon 86
	[223] Fr francium 87	[226] Ra radium 88	[227] Ac* actinium 89	[261] Rf rutherfordium 104	[262] Db dubnium 105	[266] Sg seaborgium 106	[264] Bh bohrium 107	[277] Hs hassium 108	[268] Mt meitnerium 109	[271] Ds darmstadtium 110	[272] Rg roentgenium 111	Elements with atomic numbers 112-116 have been reported but not fully authenticated						

1	H	1
	hydrogen	

relative atomic mass
atomic symbol
name
atomic (proton) number

* The lanthanoids (atomic numbers 58-71) and the actinoids (atomic numbers 90-103) have been omitted.

The relative atomic masses of copper and chlorine have not been rounded to the nearest whole number.