

OCR

Oxford Cambridge and RSA

Monday 1 June 2015 – Afternoon

GCSE ECONOMICS

A591/02 How the Market Works

Candidates answer on the Question Paper.

OCR supplied materials:

None

Other materials required:

- Calculators may be used

Duration: 1 hour



Candidate forename		Candidate surname	
-----------------------	--	----------------------	--

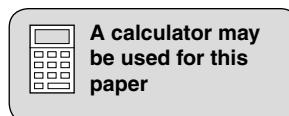
Centre number						Candidate number				
---------------	--	--	--	--	--	------------------	--	--	--	--

INSTRUCTIONS TO CANDIDATES

- Write your name, centre number and candidate number in the boxes above. Please write clearly and in capital letters.
- Use black ink. HB pencil may be used for graphs and diagrams only.
- Answer **all** the questions.
- Read each question carefully. Make sure you know what you have to do before starting your answer.
- Write your answer to each question in the space provided. If additional space is required, you should use the lined pages at the end of this booklet. The question number(s) must be clearly shown.
- Do **not** write in the bar codes.

INFORMATION FOR CANDIDATES

- The number of marks is given in brackets [] at the end of each question or part question.
- The total number of marks for this paper is **60**.
- The quality of your written communication will be taken into account in the marking of your answers to the questions labelled with an asterisk (*).
- This document consists of **16** pages. Any blank pages are indicated.



Answer **all** the questions.

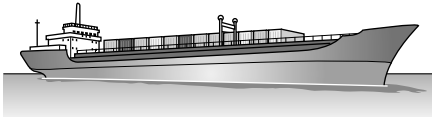
Transport

Nyeke plc is a large global transport company. The company owns ships, trains and lorries.


Kevin Nyeke is the Operations Director. He has to advise the company on the type of transport in which it should invest in each year. Kevin recommends that the company should spend all the money available for investment in 2015 on new ships. Investing in ships should achieve larger economies of scale. This would also help reduce the effects that increased competition is having on the company.

To support his advice he has produced the following.


For the same amount of energy one tonne of freight can be carried:



370 kilometres on a ship



300 kilometres on a train



100 kilometres on a lorry

Fig. 1

1 (a) From Fig. 1, identify **one** example of:

- capital

.....

- labour

..... [2]

(b) (i) Using the information in Fig. 1, what could be the opportunity cost to Nyeke plc of only investing in new ships?

..... [1]

(ii) Why do businesses have to make choices when deciding on how to invest?

.....

.....

.....

.....

.....

.....

.....

.....

..... [3]

(c) State and explain **two** effects which increased competition might have on a business such as Nyeke plc.

Effect 1

Explanation

.....
.....
.....
.....
.....
.....
.....
.....
.....

Effect 2

Explanation

.....
.....
.....
.....
.....
.....
.....
.....
.....

[6]

Petterill Valley Cakes

Petterill Valley Cakes makes cakes for birthdays, weddings and other occasions. Lauren, the owner, specialises in the making of cup cakes. She has recently reviewed the past year with her staff. In doing so she made the following points:

- the demand for birthday and wedding cakes has changed very little, even though prices have risen
- the cost of materials to make the cakes has risen
- the demand for cup cakes has increased.

Fig. 2

2 (a) Using **two** of the words below, complete the following sentence so that it defines the term 'demand'.

buy productivity quantity supply

Demand is the consumers are willing and able to
at a given price in a given period of time. **[2]**

(b) Other than a change in the cost of materials, explain **two** factors which could lead to a shift in the supply curve of Petterill Valley Cakes.

Factor 1

Explanation

.....

.....

.....

Factor 2

Explanation

.....

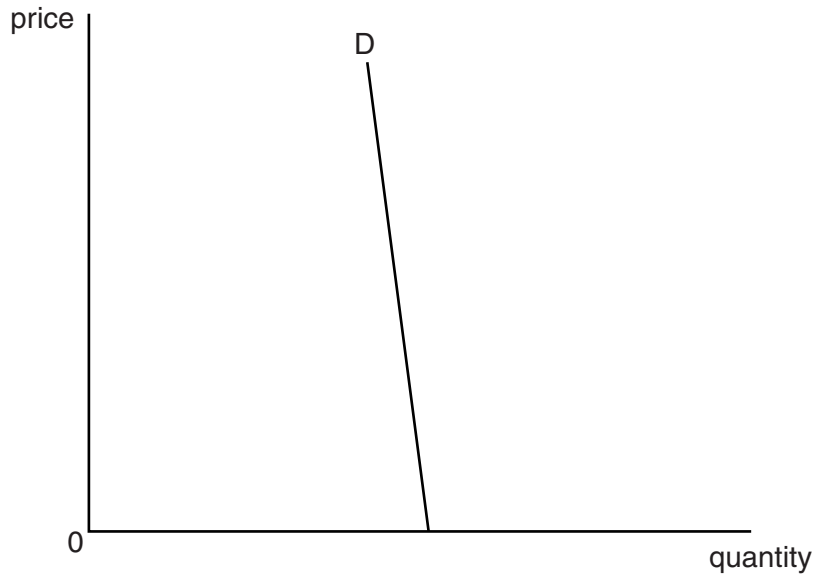
.....

..... **[4]**

(c) (i) The diagram below shows the demand curve for Petterill Valley Cakes.

On the diagram below:

- draw and label a supply curve for cakes
- draw and label a new supply curve for cakes to show the effect of a rise in the cost of materials
- label the changes in the price and quantity of cakes sold. [4]



(ii) With reference to the diagram in part (c) (i), explain what has happened to Petterill Valley Cakes' total revenue as a result of the change in supply.

.....

.....

.....

..... [2]

Incars Ltd

Bill owns Incars Ltd. The business buys and sells second hand cars. Incars Ltd is in the tertiary sector of the economy.

Bill also sells cars for customers. Last year he sold 30 cars for customers and earned an average revenue of £1000 per car sold. His costs were:

Total fixed costs of selling 30 cars	£7000
Total variable costs of selling 30 cars	£3000

Alan has asked Bill to sell his car. Bill has told Alan that he needs to reduce the price of his car by 10 per cent because the demand for his type of car is price elastic.

Incars Ltd pays one person the national minimum wage to clean and polish cars. The forthcoming rise in the national minimum wage means that Incars Ltd needs more revenue each week so that it can continue to employ this person.

Fig. 3

- 3 (a) Using an example, other than the buying and selling of cars, explain what is meant by the 'tertiary sector'.

.....
.....
.....
..... [2]

- (b) Using the information in Fig. 3, calculate the profit made by Incars Ltd from selling 30 customers' cars. Show your working.

.....
.....
.....
..... [4]

(c) (i) State what is meant by the term 'price elasticity of demand'.

.....
.....
.....
..... [2]

(ii) Explain why Bill has advised Alan to reduce the selling price of his car.

.....
.....
.....
.....
.....
.....
.....
.....
..... [4]

(d)* Discuss the advantages and disadvantages of a national minimum wage.

.....
.....
.....
.....
.....
.....
.....
.....
.....
.....
.....
.....
.....
.....
.....
.....
.....
.....
.....
.....
.....
.....
.....
.....
.....
.....
.....
.....
.....
.....
.....
.....
.....
.....
.....
.....
.....
.....
.....
.....
.....
.....
.....
.....
.....
.....
.....
.....
.....
.....

[8]

ADDITIONAL ANSWER SPACE

If additional answer space is required, you should use the following lined page(s). The question number(s) must be clearly shown in the margins.

A large area of lined paper for writing answers. It features a vertical margin line on the left side and horizontal dotted lines for writing. The lines are evenly spaced and extend across the width of the page.

A grid of horizontal dotted lines for writing, spanning most of the page. A solid vertical line runs down the left side, creating a margin.

14
BLANK PAGE

PLEASE DO NOT WRITE ON THIS PAGE

15
BLANK PAGE

PLEASE DO NOT WRITE ON THIS PAGE

PLEASE DO NOT WRITE ON THIS PAGE

OCR
Oxford Cambridge and RSA

Copyright Information

OCR is committed to seeking permission to reproduce all third-party content that it uses in its assessment materials. OCR has attempted to identify and contact all copyright holders whose work is used in this paper. To avoid the issue of disclosure of answer-related information to candidates, all copyright acknowledgements are reproduced in the OCR Copyright Acknowledgements Booklet. This is produced for each series of examinations and is freely available to download from our public website (www.ocr.org.uk) after the live examination series.

If OCR has unwittingly failed to correctly acknowledge or clear any third-party content in this assessment material, OCR will be happy to correct its mistake at the earliest possible opportunity.

For queries or further information please contact the Copyright Team, First Floor, 9 Hills Road, Cambridge CB2 1GE.

OCR is part of the Cambridge Assessment Group; Cambridge Assessment is the brand name of University of Cambridge Local Examinations Syndicate (UCLES), which is itself a department of the University of Cambridge.