

## Level 3 Cambridge Technical in Engineering

05822/05823/05824/05825/05873

### Unit 4: Principles of electrical and electronic engineering

Tuesday 17 January 2017 – Morning

Time allowed: 1 hour 30 minutes

**You must have:**

- the formula booklet for Level 3 Cambridge Technical in Engineering (inserted)
- a ruler (cm/mm)
- a scientific calculator

First Name						Last Name					
Centre Number						Candidate Number					
Date of Birth											

#### INSTRUCTIONS

- Use black ink. You may use an HB pencil for graphs and diagrams.
- Complete the boxes above with your name, centre number, candidate number and date of birth.
- Answer **all** the questions.
- Write your answer to each question in the space provided. If additional space is required, you should use the lined page(s) at the end of this booklet. The question number(s) must be clearly shown.

#### INFORMATION

- The total mark for this paper is **60**.
- The marks for each question are shown in brackets [ ].
- Where appropriate, your answers should be supported with working.
- Marks may be given for a correct method even if the answer is incorrect.
- An answer may receive no marks unless you show sufficient detail of the working to indicate that a correct method is being used.
- Final answers should be given to a degree of accuracy appropriate to the context.
- This document consists of **12** pages.

FOR EXAMINER USE ONLY	
Question No	Mark
1	/12
2	/12
3	/10
4	/6
5	/8
6	/12
<b>Total</b>	<b>/60</b>

Answer **all** questions.

- 1 (a) An ammeter with an internal resistance of  $25\ \Omega$  is used to measure the current in a  $150\ \Omega$  load resistor. The supply voltage is  $24\ \text{V}$ .

- (i) Calculate the expected reading on the ammeter.

Do not include the ammeter resistance in this calculation.

.....  
..... [2]

- (ii) Calculate the actual value of current in the circuit.

.....  
..... [2]

- (iii) Calculate the power dissipated in the ammeter.

.....  
..... [2]

- (b) The digital multimeter in Fig. 1(a) is used to measure the value of resistance between points X and Y in the resistor network shown in Fig. 1(b).



Fig. 1(a)

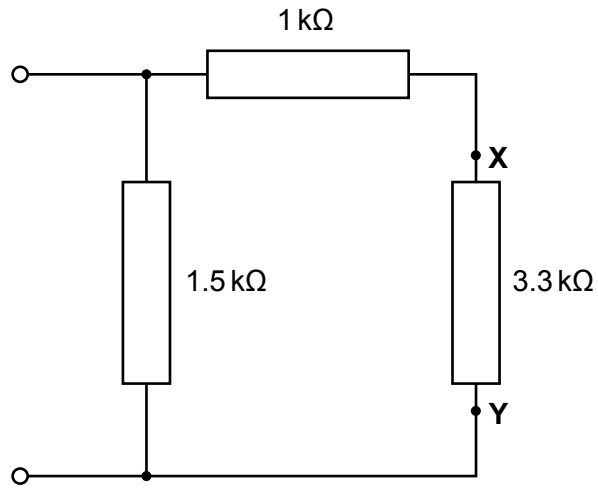


Fig. 1(b)

- (i) A pair of multimeter probes have been supplied.

Explain how to connect the probes to measure the value of resistance between points X and Y.

.....

.....

.....

..... [2]

- (ii) Calculate the value of resistance that will be displayed on the multimeter.

.....

.....

..... [3]

- (iii) State the multimeter range that should be selected when taking the resistance measurement. The selected range should allow the maximum number of significant figures to be displayed.

..... [1]

- 2 A coil with an inductance of  $0.2\text{ mH}$  and a resistance of  $75\ \Omega$  is connected across an AC supply of  $v = 210\sin 314.2t$ .

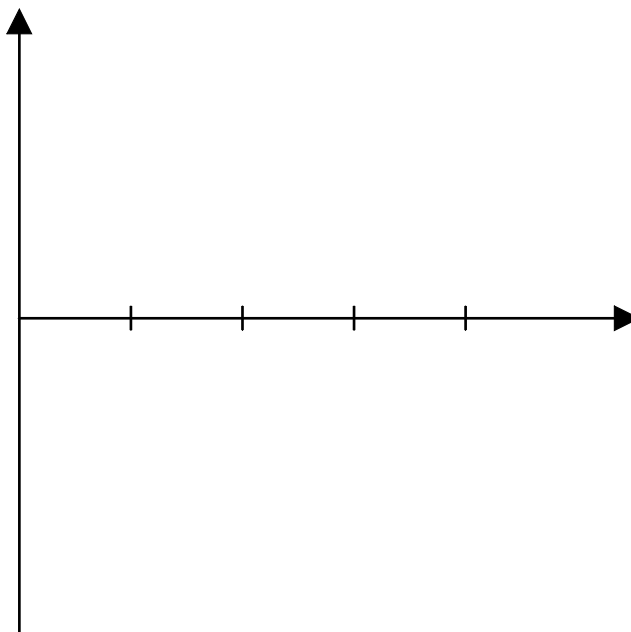
(a) Draw the circuit diagram for the AC circuit described above.

Include component and supply values on the diagram.

[3]

(b) On the axes below sketch the voltage waveform for the AC supply used in the circuit.

Include values of peak voltage and periodic time on your sketch.



[4]

(c) Calculate the current flowing through the coil.

.....  
.....  
..... [3]

(d) Calculate the voltage drop across the inductance.

.....  
..... [2]

- 3 A series wound DC motor has an armature resistance of  $0.25 \Omega$  and a field resistance of  $0.5 \Omega$ . The motor is under load and is drawing a current of 10 A. The motor is connected to a 240 V supply.

(a) Draw a circuit diagram to represent the motor circuit.

Include resistor, voltage and current values on your diagram.

[5]

(b) Calculate the e.m.f ( $E$ ) generated by the motor.

.....

.....

..... [3]

(c) State **one** application of a series wound DC motor and give **one** reason why it would be suitable for this application.

Application: .....

Reason: .....

..... [2]

- 4 (a) Draw the circuit diagram of a three-phase three wire delta connected electricity system. Indicate the line voltages on the diagram.

[3]

- (b) State the UK convention for the phase sequence of a three-phase supply.

..... [1]

- (c) State **two** advantages of a three-phase system over a single phase system.

1 .....

.....

2 .....

.....

[2]

5 (a) Draw a labelled circuit symbol of an operational amplifier.

[3]

(b) An inverting amplifier is connected with an input resistor  $R_{in}=10\text{ k}\Omega$  and a feedback resistor  $R_f = 120\text{ k}\Omega$ . The voltage gain of the inverting amplifier is given as  $= \frac{-R_f}{R_{in}}$ .

(i) Calculate the voltage gain of the inverting amplifier.

.....  
 ..... [1]

(ii) Calculate the output voltage when the input voltage is 0.2 V.

.....  
 ..... [2]

(iii) Calculate the output voltage when the input voltage is -1.5 V.

.....  
 ..... [2]



- 6 The circuit symbol for a rising edge triggered D-type bistable is shown in Fig. 2.

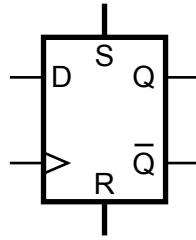



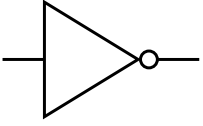
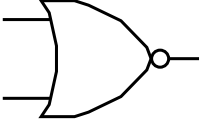
Fig. 2

- (a) Complete Q and  $\bar{Q}$  on the timing diagram below which represents the operation of the bistable shown in Fig. 2.



[5]

(b) Complete the table below.

Circuit Symbol	Logic Gate Name
	
	

[2]

(c) Draw the truth table for the Boolean expression =  $\overline{A.B + A.C}$

[5]

**END OF QUESTION PAPER**



---

# OCR

Oxford Cambridge and RSA

**Copyright Information:**

OCR is committed to seeking permission to reproduce all third-party content that it uses in its assessment materials. OCR has attempted to identify and contact all copyright holders whose work is used in this paper. To avoid the issue of disclosure of answer-related information to candidates, all copyright acknowledgements are reproduced in the OCR Copyright Acknowledgements Booklet. This is produced for each series of examinations and is freely available to download from our public website ([www.ocr.org.uk](http://www.ocr.org.uk)) after the live examination series.

If OCR has unwittingly failed to correctly acknowledge or clear any third-party content in this assessment material OCR will be happy to correct its mistake at the earliest possible opportunity.

For queries or further information please contact the Copyright Team, First Floor, 9 Hills Road, Cambridge CB2 1GE.

OCR is part of the Cambridge Assessment Group. Cambridge Assessment is the brand name of University of Cambridge Local Examinations Syndicate (UCLES), which is itself a department of the University of Cambridge.