

ADVANCED GCE
MATHEMATICS
Further Pure Mathematics 2

4726

Candidates answer on the Answer Booklet

OCR Supplied Materials:

- 8 page Answer Booklet
- List of Formulae (MF1)

Other Materials Required:

None

Friday 9 January 2009
Morning

Duration: 1 hour 30 minutes



INSTRUCTIONS TO CANDIDATES

- Write your name clearly in capital letters, your Centre Number and Candidate Number in the spaces provided on the Answer Booklet.
- Use black ink. Pencil may be used for graphs and diagrams only.
- Read each question carefully and make sure that you know what you have to do before starting your answer.
- Answer **all** the questions.
- Do **not** write in the bar codes.
- Give non-exact numerical answers correct to 3 significant figures unless a different degree of accuracy is specified in the question or is clearly appropriate.
- You are permitted to use a graphical calculator in this paper.

INFORMATION FOR CANDIDATES

- The number of marks is given in brackets [] at the end of each question or part question.
- **You are reminded of the need for clear presentation in your answers.**
- The total number of marks for this paper is **72**.
- This document consists of **8** pages. Any blank pages are indicated.

1 (i) Write down and simplify the first three terms of the Maclaurin series for e^{2x} . [2]

(ii) Hence show that the Maclaurin series for

$$\ln(e^{2x} + e^{-2x})$$

begins $\ln a + bx^2$, where a and b are constants to be found. [4]

2 It is given that α is the only real root of the equation $x^5 + 2x - 28 = 0$ and that $1.8 < \alpha < 2$.

(i) The iteration $x_{n+1} = \sqrt[5]{28 - 2x_n}$, with $x_1 = 1.9$, is to be used to find α . Find the values of x_2 , x_3 and x_4 , giving the answers correct to 7 decimal places. [3]

(ii) The error e_n is defined by $e_n = \alpha - x_n$. Given that $\alpha = 1.891\,574\,9$, correct to 7 decimal places, evaluate $\frac{e_3}{e_2}$ and $\frac{e_4}{e_3}$. Comment on these values in relation to the gradient of the curve with equation $y = \sqrt[5]{28 - 2x}$ at $x = \alpha$. [3]

3 (i) Prove that the derivative of $\sin^{-1} x$ is $\frac{1}{\sqrt{1-x^2}}$. [3]

(ii) Given that

$$\sin^{-1} 2x + \sin^{-1} y = \frac{1}{2}\pi,$$

find the exact value of $\frac{dy}{dx}$ when $x = \frac{1}{4}$. [4]

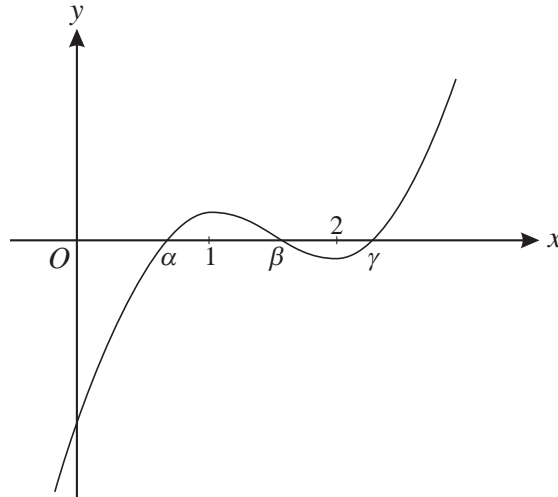
4 (i) By means of a suitable substitution, show that

$$\int \frac{x^2}{\sqrt{x^2-1}} dx$$

can be transformed to $\int \cosh^2 \theta d\theta$. [2]

(ii) Hence show that $\int \frac{x^2}{\sqrt{x^2-1}} dx = \frac{1}{2}x\sqrt{x^2-1} + \frac{1}{2}\cosh^{-1} x + c$. [4]

5



The diagram shows the curve with equation $y = f(x)$, where

$$f(x) = 2x^3 - 9x^2 + 12x - 4.36.$$

The curve has turning points at $x = 1$ and $x = 2$ and crosses the x -axis at $x = \alpha$, $x = \beta$ and $x = \gamma$, where $0 < \alpha < \beta < \gamma$.

- (i) The Newton-Raphson method is to be used to find the roots of the equation $f(x) = 0$, with $x_1 = k$.
- (a) To which root, if any, would successive approximations converge in each of the cases $k < 0$ and $k = 1$? [2]
- (b) What happens if $1 < k < 2$? [2]
- (ii) Sketch the curve with equation $y^2 = f(x)$. State the coordinates of the points where the curve crosses the x -axis and the coordinates of any turning points. [4]

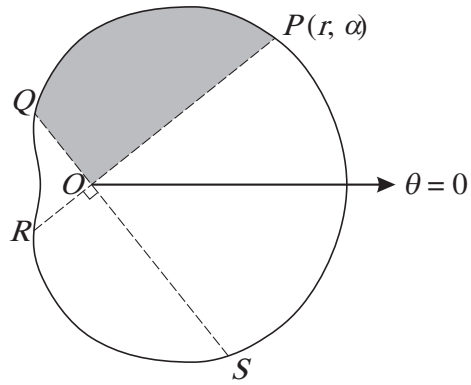
- 6 (i) Using the definitions of $\cosh x$ and $\sinh x$ in terms of e^x and e^{-x} , show that

$$1 + 2 \sinh^2 x \equiv \cosh 2x. \quad [3]$$

- (ii) Solve the equation

$$\cosh 2x - 5 \sinh x = 4,$$

giving your answers in logarithmic form. [5]



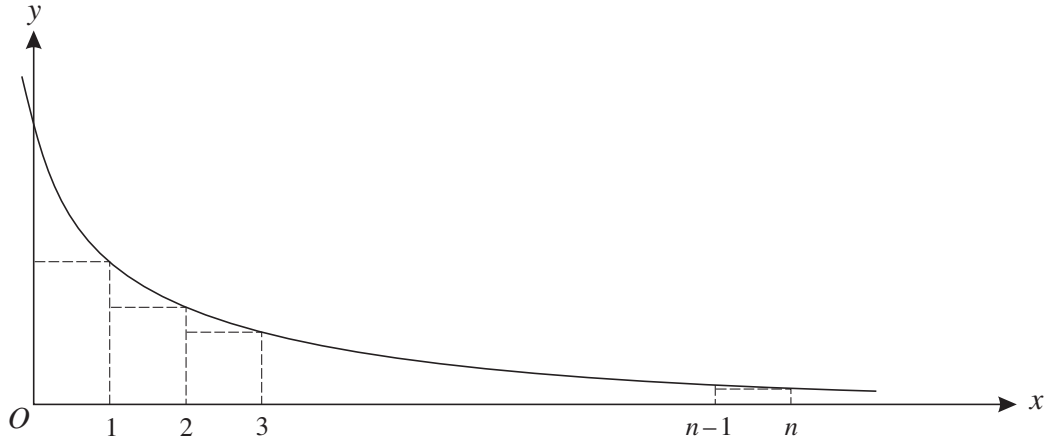
The diagram shows the curve with equation, in polar coordinates,

$$r = 3 + 2 \cos \theta, \quad \text{for } 0 \leq \theta < 2\pi.$$

The points P , Q , R and S on the curve are such that the straight lines POR and QOS are perpendicular, where O is the pole. The point P has polar coordinates (r, α) .

- (i) Show that $OP + OQ + OR + OS = k$, where k is a constant to be found. [3]
- (ii) Given that $\alpha = \frac{1}{4}\pi$, find the exact area bounded by the curve and the lines OP and OQ (shaded in the diagram). [5]

8



The diagram shows the curve with equation $y = \frac{1}{x+1}$. A set of n rectangles of unit width is drawn, starting at $x = 0$ and ending at $x = n$, where n is an integer.

(i) By considering the areas of these rectangles, explain why

$$\frac{1}{2} + \frac{1}{3} + \dots + \frac{1}{n+1} < \ln(n+1). \quad [5]$$

(ii) By considering the areas of another set of rectangles, show that

$$1 + \frac{1}{2} + \frac{1}{3} + \dots + \frac{1}{n} > \ln(n+1). \quad [2]$$

(iii) Hence show that

$$\ln(n+1) + \frac{1}{n+1} < \sum_{r=1}^{n+1} \frac{1}{r} < \ln(n+1) + 1. \quad [2]$$

(iv) State, with a reason, whether $\sum_{r=1}^{\infty} \frac{1}{r}$ is convergent. [2]

9 A curve has equation

$$y = \frac{4x - 3a}{2(x^2 + a^2)},$$

where a is a positive constant.

(i) Explain why the curve has no asymptotes parallel to the y -axis. [2]

(ii) Find, in terms of a , the set of values of y for which there are no points on the curve. [5]

(iii) Find the exact value of $\int_a^{2a} \frac{4x - 3a}{2(x^2 + a^2)} dx$, showing that it is independent of a . [5]

BLANK PAGE

BLANK PAGE



Permission to reproduce items where third-party owned material protected by copyright is included has been sought and cleared where possible. Every reasonable effort has been made by the publisher (OCR) to trace copyright holders, but if any items requiring clearance have unwittingly been included, the publisher will be pleased to make amends at the earliest possible opportunity.

OCR is part of the Cambridge Assessment Group. Cambridge Assessment is the brand name of University of Cambridge Local Examinations Syndicate (UCLES), which is itself a department of the University of Cambridge.