

Wednesday 3 June 2015 – Afternoon

GCSE GEOGRAPHY B

B563/01 Key Geographical Themes (Foundation Tier)

Candidates answer on the Question Paper.

OCR supplied materials:

- OS map extract (inserted)
- Resource Booklet (B563/A772/01/02/RB – inserted)

Other materials required:

None

Duration: 1 hour 45 minutes



Candidate forename		Candidate surname	
--------------------	--	-------------------	--

Centre number						Candidate number				
---------------	--	--	--	--	--	------------------	--	--	--	--

INSTRUCTIONS TO CANDIDATES

- The OS map extract and Resource Booklet will be found inside this document. You may not use all of the resources. The questions tell you which resource(s) you need to use.
- Write your name, centre number and candidate number in the boxes above. Please write clearly and in capital letters.
- Use black ink. HB pencil may be used for graphs and diagrams only.
- Answer **all** the questions.
- Read each question carefully. Make sure you know what you have to do before starting your answer.
- Write your answer to each question in the space provided. If additional space is required, you should use the lined pages at the end of this booklet. The question number(s) must be clearly shown.
- Do **not** write in the bar codes.

INFORMATION FOR CANDIDATES

- The number of marks is given in brackets [] at the end of each question or part question.
- The total number of marks for this paper is **99**.
- You will be assessed on the quality of written communication in your answer to the following questions: 1(g), 2(g) and 3(h). Questions marked with a pencil (✎) will carry **3** additional marks for spelling, punctuation and grammar.
- This document consists of **16** pages. Any blank pages are indicated.

- (d) State **two** methods used to reduce the risk of river flooding on people and property. Explain how **each** method works.

Method 1:

.....

.....

.....

Method 2:

.....

.....

.....

[4]

- (e) Study **Fig. 3** photographs showing evidence of coastal erosion at Skipsea, on the Holderness coast.

Places such as Skipsea have rapid rates of coastal erosion. Describe the problems this causes for people who live in places like Skipsea.

.....

.....

.....

.....

.....

.....

.....

.....

[4]

- (f) Complete the table below by matching the correct words from the list below to the descriptions of different types of coastal erosion.

One has been done for you.


abrasion (corrasion)

attrition

hydraulic action

corrosion (solution)	chemicals in sea water dissolve the rock
	air and water forced into cracks in the rock
	pebbles smash against each other
	waves smash pebbles against the rock

[2]

(g)  CASE STUDY – an example of a coastal erosion management scheme

- Name a place which has a coastal erosion management scheme.

.....

- Describe, with detail, the coastal erosion management methods for your chosen place.

.....

.....

.....

.....

.....

.....

.....

.....

- Explain, with detail, how sustainable these methods are.

.....

.....

.....

.....

.....

.....

.....

.....

[9]

+

 Spelling, punctuation and grammar [3]

SECTION B – Population and Settlement

2 Use **Figs 4, 5, 6 and 7** in the Resource Booklet and the separate **OS Map Extract**.

(a) Study the **OS Map Extract** and **Figs 4 and 5**.

(i) State **one** way the type of housing in **Fig. 4** is different from the housing in **Fig. 5**.

..... [1]

(ii) What is the correct four-figure grid reference for the location of the housing shown in **Fig. 4**?

the correct answer **9606** **9008** **9204** [1]

(iii) The housing shown in **Fig. 5** is located in grid square **9507**.
Give the correct number of the A road that goes through this housing area.

A [1]

(b) Some housing areas, like the one shown in **Fig. 4**, are knocked down and cleared.

Suggest reasons for why this happens.

.....
.....
.....
.....
.....
.....
.....
.....
.....
..... [4]

- (c) Study **Fig. 6** which shows a new shopping area.
The location of the new shopping area is shown on the separate **OS Map Extract**.

Give **two** reasons to explain why the new shopping area was built at this location.

Reason 1:

.....

.....

.....

Reason 2:

.....

.....

.....

[4]

- (d) Describe how the new shopping area may have affected existing shops and services in the central business district (CBD) of Oldham.

.....

.....

.....

.....

.....

.....

.....

.....

[4]

(e) Study **Fig. 7** which shows population pyramids for Uganda (LEDC) and the UK (MEDC).

(i) **Circle** the correct word to complete the sentence which follows:

Uganda has a ...

higher **similar** **lower**

...birth rate compared to the UK. [1]

(ii) **Circle** the correct word to complete the sentence which follows:

Uganda has a ...

higher **similar** **lower**

...life expectancy compared to the UK. [1]

(f) Suggest reasons why Uganda's life expectancy is different from the UK's.

.....

.....

.....

.....

.....

.....

.....

.....

.....

..... [4]

(g)  CASE STUDY – population growth management in a named country

- Name **one** country where population growth has been managed.

.....

- Describe, with detail, the strategies used to manage population growth in your chosen country.

.....

.....

.....

.....

.....

.....

.....

.....

- Explain how successful the population management strategies have been.

.....

.....

.....

.....

.....

.....

.....

.....

[9]

+

 **Spelling, punctuation and grammar [3]**

SECTION C – Natural Hazards

3 Use **Figs 8a, 8b** and **9** in the Resource Booklet.

(a) Study **Fig. 8a** which shows information about the ten deadliest volcanoes of the twentieth century.


(i) How many deaths were caused by the Mount Pelée volcano?
..... [1]

(ii) Which country had the highest number of deadliest volcanoes?
..... [1]

(b) Study the map **Fig. 8b**.

Name the plate which is moving towards the South American plate.
..... [1]

(c) Draw an **annotated** diagram to show how one type of tectonic plate movement can cause a volcanic eruption. (Annotated means to add written notes to your diagram.)



[4]

(d) State **two** features of a volcanic eruption that may kill people.

Feature 1:

.....

Feature 2:

.....

[2]

(e) Describe, with detail, **two** methods used to predict volcanic eruptions.

Method 1:

.....

.....

.....

Method 2:

.....

.....

.....

[4]

(f) Explain the benefits for people who live in areas of volcanic activity.

.....

.....

.....

.....


.....

.....

.....

.....

[4]

(h)  **CASE STUDY – An example of a climatic hazard event in an LEDC**
(such as a severe drought or a tropical storm)

- Name an **LEDC** place which experienced a climatic hazard event.

.....

- Describe, with detail, the methods that were used to reduce the impact of the climatic hazard.

.....

.....

.....

.....

.....

.....

.....

.....

- Explain, with detail, how successful these methods were.

.....

.....

.....

.....

.....

.....

.....

.....

[9]

+

 **Spelling, punctuation and grammar [3]**

END OF QUESTION PAPER

ADDITIONAL ANSWER SPACE

If additional answer space is required, you should use the following lined page(s). The question number(s) must be clearly shown in the margins.

A large area of lined paper for writing. It consists of a vertical solid line on the left side, creating a margin. To the right of this line, there are numerous horizontal dotted lines spaced evenly down the page, providing a guide for writing.

A large rectangular area with a vertical line on the left side and horizontal dotted lines across the page, intended for writing answers.



Copyright Information

OCR is committed to seeking permission to reproduce all third-party content that it uses in its assessment materials. OCR has attempted to identify and contact all copyright holders whose work is used in this paper. To avoid the issue of disclosure of answer-related information to candidates, all copyright acknowledgements are reproduced in the OCR Copyright Acknowledgements Booklet. This is produced for each series of examinations and is freely available to download from our public website (www.ocr.org.uk) after the live examination series.

If OCR has unwittingly failed to correctly acknowledge or clear any third-party content in this assessment material, OCR will be happy to correct its mistake at the earliest possible opportunity.

For queries or further information please contact the Copyright Team, First Floor, 9 Hills Road, Cambridge CB2 1GE.

OCR is part of the Cambridge Assessment Group; Cambridge Assessment is the brand name of University of Cambridge Local Examinations Syndicate (UCLES), which is itself a department of the University of Cambridge.